

Holy Cross Convent Sr. Sec. School, Ambikapur

Class-II

Subject-MATHEMATICS

Note- *Students are requested to write the following notes in their maths fair copy. Students are instructed to write in a good handwriting with pencil.*

Chapter-5

TIME

I. Fill in the blanks-

1. The long hand of the clock shows the **minute.**
2. The short hand of the clock shows the **hour.**
3. 1 day= **24** hours.
4. 1 hour= **60** minutes.
5. 1 minute= **60** seconds.

I. Draw clock and show the time-

(a) 8 O'clock

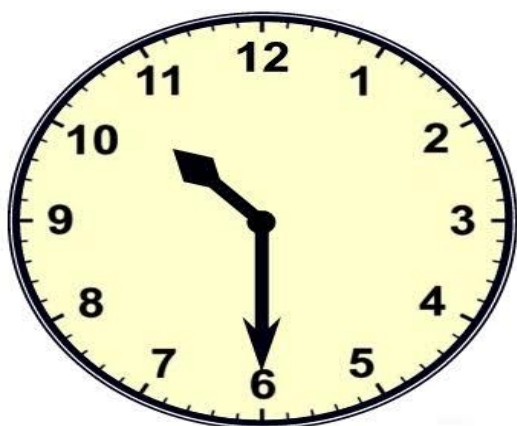


(b) 2 O'clock

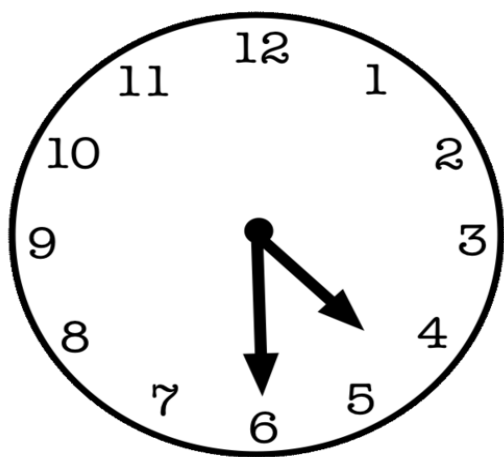


shutterstock.com • 404962093

(c) Half past 10



(d) Half past 4



(e) Quarter past 7



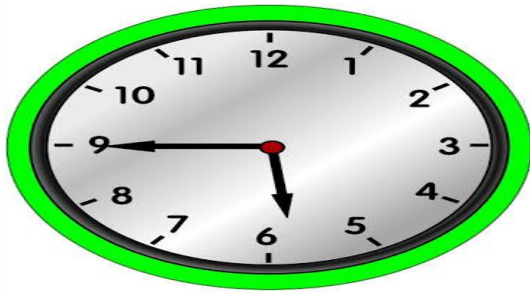
(f) Quarter past 11



(g) Quarter to 1



(h) Quarter to 6



quarter to six